

Varied Fluency

Step 4: One More One Less

National Curriculum Objectives:

Mathematics Year 1: (1N2b) [Given a number, identify one more and one less](#)

Mathematics Year 1: (1N4) [Identify and represent numbers using objects and pictorial representations including the number line, and use the language of: equal to, more than, less than \(fewer\), most, least](#)

Mathematics Year 1: (1N2c) [Read and write numbers from 1 to 20 in numerals and words](#)

Differentiation:

Developing Questions to support finding one more and one less than numbers to 50 in numerals only. Includes numbers that do not cross 10 i.e. ($36 \leftarrow 37 \rightarrow 38$). Using ten frames, number pieces, bead strings and number tracks.

Expected Questions to support finding one more and one less than numbers to 50. Using Base 10, straws, number pieces and number tracks. Numerals only.

Greater Depth Questions to support finding one more and one less, including some examples of one more and one less again for numbers to 50, in numerals and words. Using Base 10, place value counters and partially completed number tracks.

More [Year 1 Place Value](#) resources.

Did you like this resource? Don't forget to [review](#) it on our website.

One More One Less

1a. Circle the number that is one more than the amount shown below.



45

40

37

VF

One More One Less

1b. Circle the number that is one less than the amount shown below.



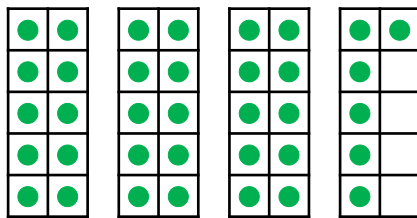
48

16

33

VF

2a. Find one more and one less than the number shown below.



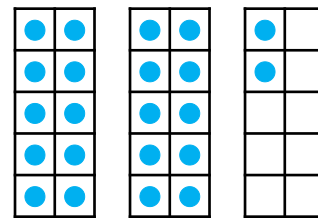
One more is .

One less is .



VF

2b. Find one more and one less than the number shown below.



One more is .

One less is .



VF

3a. Complete the sentences.



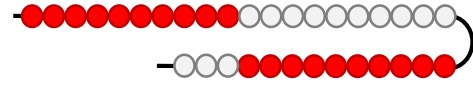
There are beads.

One more than is .



VF

3b. Complete the sentences.



There are beads.

One less than is .



VF

4a. Use the number track to complete the sentence.



44 is one less than .



VF

4b. Use the number track to complete the sentence.



27 is one more than .




VF

One More One Less

One More One Less

5a. Circle the number that is one more than the amount shown below.




24 40 31



VF

5b. Circle the number that is one less than the amount shown below.




29 38 19



VF

6a. Find one more and one less than the number shown below.



28	29	30	31	32	33	34
----	----	----	----	----	----	----


One more is .

One less is .



VF

6b. Find one more and one less than the number shown below.



37	38	39	40	41	42	43
----	----	----	----	----	----	----


One more is .

One less is .



VF

7a. Complete the sentences.



There are straws.


One more than is .

One less than is .



VF

7b. Complete the sentences.



There are straws.

One more than is .

One less than is .



VF

8a. Use the number track to complete the sentence.

35	36	37	38	39	40	41
----	----	----	----	----	----	----

38 is one less than .



VF

8b. Use the number track to complete the sentence.

37	38	39	40	41	42	43
----	----	----	----	----	----	----


40 is one more than .



VF

One More One Less

9a. Circle the number that is one more than the amount shown below.



34

49

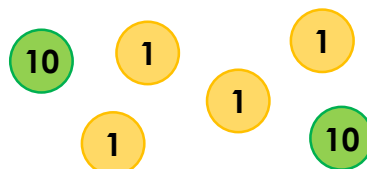
41



VF

One More One Less

9b. Circle the number that is one less than the amount shown below.



32

26

23



VF

10a. Find one more and one more again than twenty-nine.

28	29	30	31	32	33	34
----	----	----	----	----	----	----

One more is .

One more again is .



VF

10b. Find one less and one less again than thirty-one.

28	29	30	31	32	33	34
----	----	----	----	----	----	----

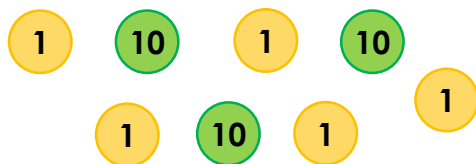
One less is .

One less again is .



VF

11a. Complete the sentences.



The number is .

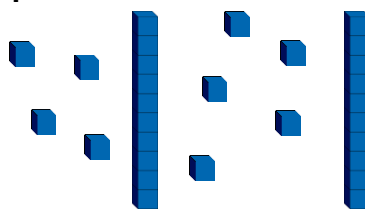
One more than is .

One more again is .



VF

11b. Complete the sentences.



The number is .

One less than is .

One less again is .



VF

12a. Use the number track to complete the sentence.

<input type="text"/>	36	<input type="text"/>	38	<input type="text"/>	40	41
----------------------	----	----------------------	----	----------------------	----	----

is one less than 40.



VF

12b. Use the number track to complete the sentence.

27	28	<input type="text"/>	30	<input type="text"/>	<input type="text"/>	33
----	----	----------------------	----	----------------------	----------------------	----

is one less than 30.



VF

Varied Fluency
One More One Less

Developing

- 1a. 37
2a. One more is 37.
One less is 35.
3a. There are 27 beads.
One more than 27 is 28.
4a. 45

Expected

- 5a. 31
6a. One more is 32.
One less is 30.
7a. There are 43 straws.
One more than 43 is 44.
One less than 43 is 42.
8a. 39

Greater Depth

- 9a. 49
10a. One more is 30.
One more again is 31.
11a. The number is 35.
One more than 35 is 36.
One more again is 37.
12a. 39

Varied Fluency
One More One Less

Developing

- 1b. 16
2b. One more is 23.
One less is 21.
3b. There are 33 beads.
One less than 33 is 32.
4b. 26

Expected

- 5b. 38
6b. One more is 41.
One less is 39.
7b. There are 29 straws.
One more than 29 is 30.
One less than 29 is 28.
8b. 39

Greater Depth

- 9b. 23
10b. One less is 30.
One less again is 29.
11b. The number is 29.
One less than 29 is 28.
One less again is 27.
12b. 29